



Question 1 continued

Leave
blank

Lined area for writing answers.

(Total 7 marks)

Q1



N 3 4 2 7 5 A 0 3 2 4



5.

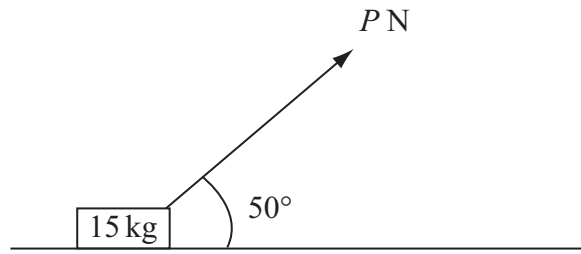


Figure 1

A small box of mass 15 kg rests on a rough horizontal plane. The coefficient of friction between the box and the plane is 0.2. A force of magnitude P newtons is applied to the box at 50° to the horizontal, as shown in Figure 1. The box is on the point of sliding along the plane.

Find the value of P , giving your answer to 2 significant figures.

(9)





Question 6 continued

Leave
blank

Lined area for writing answers.



N 3 4 2 7 5 A 0 1 3 2 4



Question 6 continued

Leave
blank

Lined area for writing answers.



7.

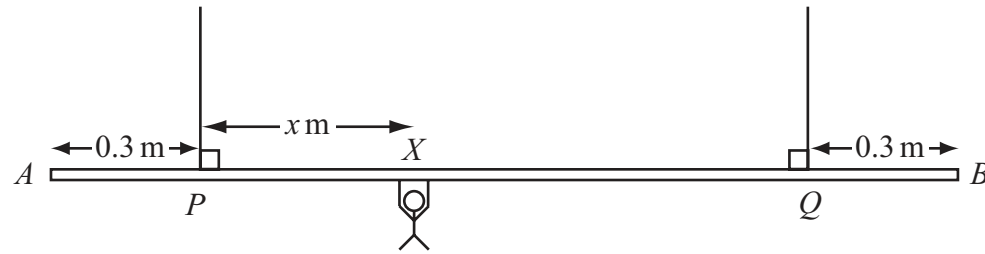


Figure 2

A beam AB is supported by two vertical ropes, which are attached to the beam at points P and Q , where $AP = 0.3$ m and $BQ = 0.3$ m. The beam is modelled as a uniform rod, of length 2 m and mass 20 kg. The ropes are modelled as light inextensible strings. A gymnast of mass 50 kg hangs on the beam between P and Q . The gymnast is modelled as a particle attached to the beam at the point X , where $PX = x$ m, $0 < x < 1.4$ as shown in Figure 2. The beam rests in equilibrium in a horizontal position.

(a) Show that the tension in the rope attached to the beam at P is $(588 - 350x)$ N. (3)

(b) Find, in terms of x , the tension in the rope attached to the beam at Q . (3)

(c) Hence find, justifying your answer carefully, the range of values of the tension which could occur in each rope. (3)

Given that the tension in the rope attached at Q is three times the tension in the rope attached at P ,

(d) find the value of x . (3)





Question 7 continued

Leave
blank

A large rectangular area containing 30 horizontal lines for writing answers.



N 3 4 2 7 5 A 0 1 7 2 4



8. [In this question \mathbf{i} and \mathbf{j} are horizontal unit vectors due east and due north respectively.]

A hiker H is walking with constant velocity $(1.2\mathbf{i} - 0.9\mathbf{j}) \text{ m s}^{-1}$.

(a) Find the speed of H .

(2)




Figure 3

A horizontal field $OABC$ is rectangular with OA due east and OC due north, as shown in Figure 3. At twelve noon hiker H is at the point Y with position vector $100\mathbf{j}$ m, relative to the fixed origin O .

(b) Write down the position vector of H at time t seconds after noon.

(2)

At noon, another hiker K is at the point with position vector $(9\mathbf{i} + 46\mathbf{j})$ m. Hiker K is moving with constant velocity $(0.75\mathbf{i} + 1.8\mathbf{j}) \text{ m s}^{-1}$.

(c) Show that, at time t seconds after noon,

$$\overrightarrow{HK} = [(9 - 0.45t)\mathbf{i} + (2.7t - 54)\mathbf{j}] \text{ metres.}$$

(4)

Hence,

(d) show that the two hikers meet and find the position vector of the point where they meet.

(5)



Question 8 continued

Leave
blank

Lined writing area for question 8.

Q8

(Total 13 marks)

TOTAL FOR PAPER: 75 MARKS

END



BLANK PAGE

